




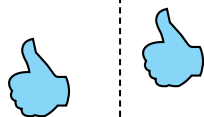
Determine if the shape is translating (slide), rotating (turn) or reflecting (flip).

Answers

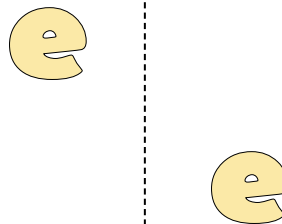
1)



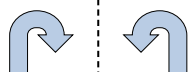
2)



3)




4)



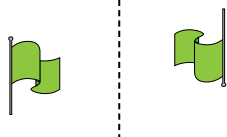
5)



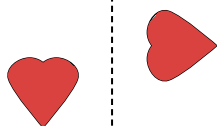
6)



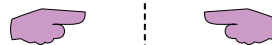
7)



8)




9)



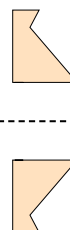
10)



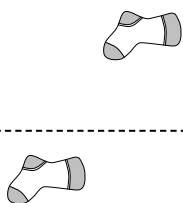
11)



12)



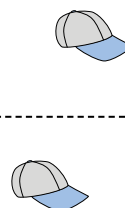
13)



14)



15)

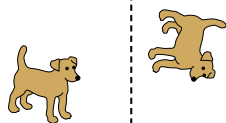


1. \_\_\_\_\_
2. \_\_\_\_\_
3. \_\_\_\_\_
4. \_\_\_\_\_
5. \_\_\_\_\_
6. \_\_\_\_\_
7. \_\_\_\_\_
8. \_\_\_\_\_
9. \_\_\_\_\_
10. \_\_\_\_\_
11. \_\_\_\_\_
12. \_\_\_\_\_
13. \_\_\_\_\_
14. \_\_\_\_\_
15. \_\_\_\_\_

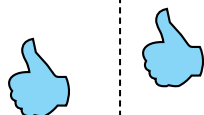


Determine if the shape is translating (slide), rotating (turn) or reflecting (flip).

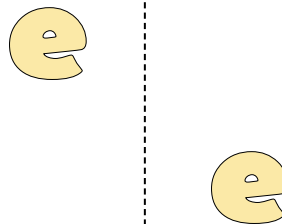
1)



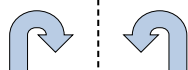
2)




3)




4)



5)



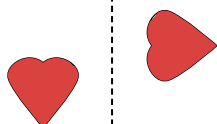
6)



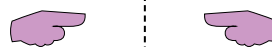
7)



8)




9)



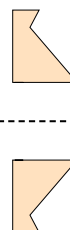
10)



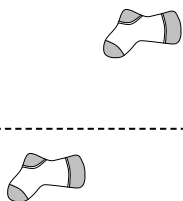
11)



12)



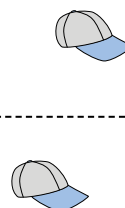
13)



14)



15)



Answers

1. rotating
2. translating
3. translating
4. reflecting
5. translating
6. rotating
7. rotating
8. rotating
9. reflecting
10. reflecting
11. reflecting
12. reflecting
13. translating
14. translating
15. translating